

Well # or name _____

Water Well Stratigraphic Chart









Lithology

depth below surface (feet) Elevation (feet above sea level)

Well surface elevation _____
(feet above sea level)

0		
10		
20		
30		
40		
50		
60		
70		
80		
90		
100		
110		
120		
130		
140		
150		
160		
170		
180		
190		
200		

Lithologic Key

-  top soil
-  clay
-  sand
-  gravel
-  shale
-  sandstone and shale
-  sandstone
-  water level

well surface elevation
minus depth below surface
= elevation (in ft. above
sea level)