

## **CPMP Longitudinal Study**

### **Developing Mathematical Literacy**

In 1986 the Board of Directors of the National Council of Teachers of Mathematics (NCTM) established the Commission on Standards for School Mathematics to:

- Create a coherent vision of what it means to be mathematically literate both in a world that relies on calculators and computers to carry out mathematical procedures and in a world where mathematics is rapidly growing and is extensively being applied in diverse fields; and
- Create a set of standards to guide the revision of the school mathematics curriculum and its associated evaluation toward this vision (NCTM, 1989, p.1).

The products of this charge were NCTM's three Standards documents published in 1989, 1991, and 1995, and its recently published *Principles and Standards for School Mathematics* (2000).

The central tenet underlying this charge is that in today's information age and data-drenched society, to develop an informed citizenry and to support a democratic government, it is essential that *all* high school graduates be mathematically as well as verbally literate. To meet this challenge, over the last decade mathematics education has been negotiating several difficult transitions set out in *Everybody Counts* (MSEB 1989), including:

- Shifting the focus of school mathematics from a dualistic mission – minimal mathematics for the majority, advanced mathematics for a few – to a singular focus on a significant common core of mathematics for all students (p. 81); and
- Shifting the teaching of mathematics from [sole] emphasis on tools for future courses, to greater emphasis on topics that are relevant to students' present and future needs (p. 83).

Since 1992, with support from the National Science Foundation, the Core-Plus Mathematics Project (CPMP) has been developing and evaluating a comprehensive high school mathematics curriculum intended to help U.S. schools in making these transitions as they work toward implementing the curriculum, instruction, and assessment recommendations in the *Standards* documents.

### **Elements of Mathematical (Quantitative) Literacy**

In developing the CPMP curriculum we have taken the perspective that most mathematics in a high school program intended for all students should be developed in the context of its uses, with the abstraction and appreciation of mathematics as a deductive logical system building slowly across the four-course curriculum. Topics that have received increased attention in the CPMP curriculum include:

- Probability, which facilitates reasoning about uncertainty and assessment of risk;
- Exploratory data analysis and statistics, which facilitate reasoning about data;
- Model-building, which facilitates systematic, structured understanding of complex situations;
- Operations research, which facilitates planning of complex tasks and achieving performance objectives;
- Discrete mathematics, which facilitates understanding of most applications of computers.

However, mathematical literacy requires more than the acquisition of an expanded list of quantitative skills. As Price (1997) argues, logical thinking, analysis of evidence, and statistical reasoning are more important for engaged citizenship in the twenty-first century, than traditional mathematical skills. Perhaps this more comprehensive view of mathematical literacy is best captured in the International Life Skills Survey currently underway that defines *quantitative literacy* as reported in Steen (2001) as:

An aggregate of skills, knowledge, beliefs, dispositions, habits of mind, communication capabilities, and problem solving skills that people need in order to engage effectively in quantitative situations arising in life and work.

Sometimes *mathematical literacy* and *quantitative literacy* are used interchangeably, but often they are used to denote important distinctions. For example, to distinguish between what is needed for life (quantitative) and what is needed for education (mathematics), or between what is needed for general school subjects (quantitative) and what is needed for engineering and physical science (mathematics) (Steen 2001). The CPMP curriculum has attempted to unify these orientations in an integrated, contextualized approach that is at once applied and theoretical, concrete and conceptual, practical and academic.

### **Assessing Mathematical Literacy**

As part of the national field-testing of the CPMP curriculum, a standardized test called *Ability to Do Quantitative Thinking* (ITED-Q) (Feldt, Forsyth, Ansley & Alnot, 1993) was administered as a pretest to all CPMP students at the beginning of grade 9 and in alternative forms as posttests at the end of grade 9, grade 10, and grade 11. This test is a subtest of the *Iowa Tests of Educational Development* (ITED). The ITED-Q assesses high school students' ability to use appropriate mathematical reasoning in situations requiring the interpretation of data, charts, or graphs that represent information related to business, social and political issues, medicine, and science. It consists of three subtests:

- *Understanding Mathematical Concepts and Procedures*  
Items require students to select appropriate procedures, make connections among various concepts, and identify examples and counterexamples of concepts.
- *Interpreting Information*  
Items require students to make inferences or predictions based on data or information often given in graphs or tables.
- *Solving Problems*  
Items require students to apply quantitative procedures to relatively novel situations, reason quantitatively, and evaluate reasonableness of solutions.

The mathematical content includes whole numbers, exponents, fractions, decimals, percents, ratios, geometry, measurement, estimation, rounding, statistics, probability, tables, and graphs. Although very little symbolic algebra is required, the ITED-Q is quite demanding for the full range of high school students. For examples, on ITED-Q (Form K, Level 16) the median of the nationally representative norm group in Spring of Grade 10 is approximately 15 of 40 items correct and the 99th percentile is approximately 35 of 40 items correct.

The main field-test results related to ITED-Q are the following. For more details, see Schoen, Hirsch, and Ziebarth (1998) and [Schoen and Hirsch \(2003\)](#).

- At the end of Course 1, CPMP students' mean performance was significantly greater than that of ITED-Q pretest-matched Algebra students in more traditional curricula on the ITED-Q posttest.
- A similar pattern can be seen in Figure 1 where the means of the 1,457 students who completed the four ITED-Q test forms (pretest and end of Courses 1, 2, and 3) are compared to the growth of the ITED-Q's nationally representative norm group at the same pretest percentile (62nd) over the same test times. The growth of the CPMP students was significantly greater than that of the norm group during the first year of the field test and that improvement was maintained in the second and third years. This three-year pattern is consistent, on average, in rural, urban, and suburban schools, for males and females, for various minority groups, and for students for whom English was not their first language.

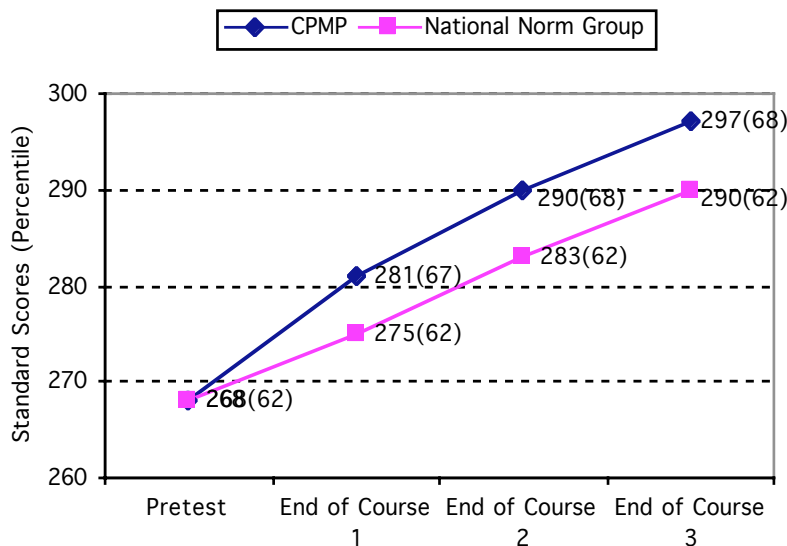


Figure 1. Three-year trends in ITED-Q standard scores and national student percentiles (based on all 1,457 CPMP students with complete data).

This report provides further data and analyses of the mathematical literacy achieved by students in CPMP classrooms. The preliminary results reported here are derived from a five-year longitudinal study of cohorts of students in three high schools that have been using the published *Core-Plus Mathematics* program, *Contemporary Mathematics in Context* (Coxford, Fey, Hirsch, Schoen et al., 1997, 1998, 1999, 2001), with all students.

### International Comparisons

During 1995, the Third International Mathematics and Science Study (TIMSS) assessed the mathematics and science knowledge of a half-million students from 41 nations at three levels of schooling. In this report, our focus is on the TIMSS assessment of mathematics general knowledge of students in the last year of secondary school, including those who had taken advanced courses as well as those who had not. Mathematics general knowledge items were chosen by TIMSS “based on their likelihood of arising in real-life situations and not on their connection to a particular curriculum. However, they can be described in terms of common mathematics curriculum topics, such as number sense, including fractions, percentages, and proportionality; algebraic sense; measurement and estimation; and data representation.” (USDE, 1998; p. 30). Clearly, mathematical literacy as discussed earlier has much in common with the



## Procedures

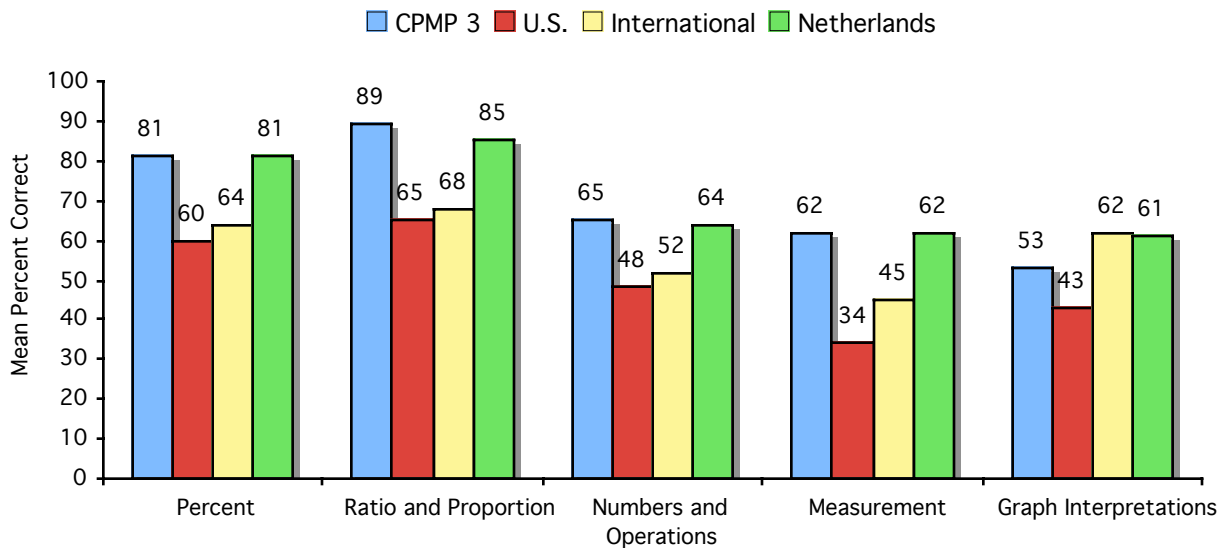
In the present study, a test composed of TIMSS mathematical literacy assessment items was used to gather further evidence concerning how well *Standards*-oriented curricula prepare students in the mathematical competencies usually associated with quantitative literacy. Twelve released TIMSS mathematics general knowledge items were chosen, two or three from each of five content subtests (percent, ratio and proportion, numbers and operations, measurement, and graphical interpretation). To maintain a split between multiple-choice and free-response items similar to TIMSS, 10 of the items chosen were multiple-choice and two were free-response. As in TIMSS, students had access to a calculator and were given a time limit that allowed an average of about two minutes per item. This test was administered to all 371 students at the end of CPMP Course 3 in three high schools that use the CPMP curriculum as their only high school program. The students who had attended middle school in the same district as their high school (about 80% of tested students) also completed a *Standards*-oriented curriculum in middle school. Two of the participating school districts used the Connected Mathematics Project (CMP) curriculum and the other used the MATH Thematics (STEM) curriculum. The vast majority of the students were juniors, and less than 5% were either sophomores or seniors.

Two of the schools are in rural settings, and one is in a small city. The student population in one of the rural schools was about 28% under-represented minority, while the minority population of the other two schools was under 8%. Prior to the adoption of the CPMP curriculum, students in these three schools at the beginning of grade 9 scored on average at the 56th student percentile on the ITED-Q. On the whole, the communities these schools serve are working class and their students are not academically elite.

After testing these students, we scored their work using the scoring rubrics and answer key provided by TIMSS. We then compared the CPMP students' performance by content subtest and by item to the TIMSS performance data for the U.S., the international average, and the Netherlands.

## Results

Means by content subtest of the 371 CPMP students and the TIMSS samples from the United States, the Netherlands, and the 21-country compilation are presented in Figure 2. The subtest means of the CPMP students were consistently higher than the U.S. and international samples and were similar to the Netherlands, the highest performing country. Individual items together with performance statistics can be found in the Appendix. Multiple-choice items were scored as right or wrong and the two open-ended items were scored using two-point rubrics provided by TIMSS.



*Figure 2.* Mathematics General Knowledge Subtest Means

To further examine the performance of the CPMP students by subtest, we computed the effect size for each subtest and for each of the three comparison groups. See Table 2. The effect size is the number of standard deviations by which the CPMP subtest mean differed from each of the TIMSS comparison groups. Here the standard deviation is that of the CPMP group.

$$\text{Effect size (ES)} = (\text{CPMP mean} - \text{TIMSS group mean}) / (\text{CPMP standard deviation})$$

Table 2

*Subtest means and effect sizes for CPMP and TIMSS groups*

<b>Subtest</b>	<b>CPMP</b>		<b>U.S.</b>		<b>International</b>		<b>Netherlands</b>	
	<b>Mean</b>	<b>SD</b>	<b>Mean</b>	<b>ES</b>	<b>Mean</b>	<b>ES</b>	<b>Mean</b>	<b>ES</b>
Percent	81.13	30.66	59.75	0.70	63.95	0.56	81.20	0.00
Ratio & Proportion	88.68	22.81	64.75	1.05	68.10	0.90	84.60	0.18
Numbers & Operations	65.36	37.03	47.85	0.47	52.35	0.33	63.65	0.05
Measurement	62.44	30.46	34.23	0.93	45.07	0.57	62.13	0.01
Graphical Interpretation	52.78	24.06	43.26	0.40	48.02	0.20	60.56	-0.32

As seen in Table 2, with the exception of the graphical interpretation subtest, the CPMP means were similar to those of the Netherlands with effect sizes on other subtests ranging from 0.00 on the percent subtest to 0.18 on the ratio & proportion subtest. Across the three TIMSS samples, the largest effect sizes on any subtest were on ratio & proportion, 1.05 for the U.S. sample, 0.90 for the international sample, and 0.18 for the Netherlands sample. The CPMP means were much higher than the U.S. means with effect sizes ranging from 0.40 on the graphical interpretation subtest to 0.93 on the measurement subtest and 1.05 on the ratio & proportion subtest. CPMP students also performed considerably better than the international sample on all subtests, with effect sizes ranging from 0.20 on the in the graphical interpretation subtest 0.90 on the ratio & proportion subtest, mentioned earlier.

Performance of the CPMP students was generally consistent across the three schools as Table 3 shows. A MANOVA with the five subtest scores as dependent variables and school as independent variable resulted in no significant overall school differences ( $p = 0.34$ ). With the exception of a difference of about one-third of a standard deviation between the means of School 1 and School 2 on the percent subtest, the school differences on individual subtests are well within chance variation.

Table 3

*Subtest means and standard deviations for CPMP students by school*

Subtest	CPMP (N = 371)		School 1 (N = 269)		School 2 (N = 56)		School 3 (N = 46)	
	Mean	SD	Mean	SD	Mean	SD	Mean	SD
Percent	81.13	30.66	78.62	32.01	88.39	25.21	86.96	26.74
Ratio & Proportion	88.68	22.81	88.29	23.31	91.07	19.32	88.04	24.00
Numbers & Operations	65.36	37.03	65.43	37.83	63.39	35.02	67.39	35.30
Measurement	62.44	30.46	61.71	31.68	67.26	25.02	60.87	29.23
Graphical Interpretation	52.78	24.06	52.04	24.69	52.86	22.70	56.96	21.90

A variable that is always of interest in assessing mathematical literacy is gender. TIMSS provides item data by gender for each country, although on the two-point, free-response items only the percent of students scoring 2 is provided. To remain consistent with our other tables, we present four subtest means by gender and student group in Table 4. The free-response items are both in the graphical interpretation subtest, so we do not include it in Table 4.

Table 4

*Means for four subtests by gender and group*

Subtest	CPMP		U.S.		International		Netherlands	
	Males Mean(SD)	Females Mean(SD)	Males Mean	Females Mean	Males Mean	Females Mean	Males Mean	Females Mean
Percent	84.7(27.8)	78.2(32.6)	62.5	57.0	68.0	60.3	87.5	74.6
Ratio & Proportion	89.8(20.2)	87.8(24.8)	64.7	64.8	69.9	66.4	87.7	81.5
Numbers & Operations	69.5(36.3)	62.0(37.3)	49.9	45.8	57.1	48.1	71.2	55.7
Measurement	65.7(30.9)	59.8(29.9)	34.4	34.0	48.5	41.9	68.0	56.0

With few exceptions, the means of the males are higher than those of the females in every group and on every subtest. It is interesting to note that on these items, the subtest means of the males and females were most alike in the U.S. sample, followed closely by the CPMP group. Internationally, the gender differences were somewhat larger than in the U.S., and gender differences are particularly substantial in the Netherlands. Partly due to the large gender

difference in the Netherlands, the CPMP females out-performed the females in the Netherlands on every subtest, with effect sizes ranging from 0.11 to 0.25. The performance of CPMP males was similar to that of males in the Netherlands with effect sizes ranging from  $-0.10$  to  $0.11$ .

A perusal of a fairly small sample of the TIMSS data for released items suggests that there are large country-by-country differences in the size of the gender gap on the mathematics general knowledge assessment. It seems likely that the size of a country's gender gap in achievement is related to their gender gap in mathematics course background among students in the last year of secondary school. The mathematics course background variable, of course, is not an issue in the CPMP sample, since all students have completed Courses 1–3 of the CPMP curriculum.

## **Discussion**

There is a growing recognition of the importance of mathematical literacy for the general population. In this area, Standards-based curricula show a great deal of promise. In addition to the results summarized above, an invitational group of 21 Michigan schools that used curricula that align with the state's high standards (based on the NCTM Standards) scored even better than the state of Michigan overall on the TIMSS-R which was at grade 8 only, and Michigan was the highest scoring state in the country. The most common pre-high school curricula in these schools were Everyday Mathematics and the Connected Mathematics. An important point, too, is that the invitational group contained a substantial number of schools in low-SES districts (Schoenfeld, 2002).

## REFERENCES

- Coxford, A.F., Fey, J.T., Hirsch, C.R., Schoen, H.L., Burrill, G., Hart, E.W., Watkins, A.E. with Messenger, M.J., & Ritsema, B. (1997). *Contemporary Mathematics in Context: A unified approach* (Course 1). Columbus, OH: Glencoe/McGraw-Hill.
- Coxford, A.F., Fey, J.T., Hirsch, C.R., Schoen, H.L., Burrill, G., Hart, E.W., Watkins, A.E. with Messenger, M.J., & Ritsema, B. (1998). *Contemporary Mathematics in Context: A unified approach* (Course 2). Columbus, OH: Glencoe/McGraw-Hill.
- Coxford, A.F., Fey, J.T., Hirsch, C.R., Schoen, H.L., Burrill, G., Hart, E.W., Watkins, A.E. with Messenger, M.J., & Ritsema, B. (1999). *Contemporary Mathematics in Context: A unified approach* (Course 3). Columbus, OH: Glencoe/McGraw-Hill.
- Coxford, A.F., Fey, J.T., Hirsch, C.R., Schoen, H.L., Hart, E.W., Keller, B.A., Watkins, A.E. with Ritsema, B., & Walker, R.K. (2001). *Contemporary Mathematics in Context: A unified approach* (Course 4). Columbus, OH: Glencoe/McGraw-Hill.
- Feldt, L.S., Forsyth, R.A., Ansley, T.N., & Alnot, S.D. (1993). *Iowa tests of educational development (Forms K & L)*. Chicago: The Riverside Publishing Company.
- I.E. A. TIMSS. (1998). *TIMSS released item set for the final year of secondary school: Mathematics and science literacy, advanced mathematics, physics*. Boston, MA: Boston College.
- National Council of Teachers of Mathematics. (2000). *Principles and Standards for School Mathematics*. Reston, VA: The Council.
- National Council of Teachers of Mathematics. (1995). *Assessment Standards for School Mathematics*. Reston, VA: The Council.
- National Council of Teachers of Mathematics. (1991). *Professional Standards for Teaching Mathematics*. Reston, VA: The Council.
- National Council of Teachers of Mathematics. (1989). *Curriculum and Evaluation Standards for School Mathematics*. Reston, VA: The Council.

- National Research Council. (1989). *Everybody Counts: A report to the nation on the future of mathematics education*. Washington, DC: National Academy Press.
- Price, G. (1997). Quantitative literacy across the curriculum. In L.A. Steen (Ed.). *Why Numbers Count* (pp. 155-160). New York: College Entrance Examination Board.
- Schoen, H. L. & Hirsch, C. R. (In press). The Core-Plus Mathematics Project: Perspectives and student achievement. In S. Senk and D. Thompson (Eds.), *Standards-Oriented School Mathematics Curricula: What Does the Research Say About Student Outcomes?* Hillsdale, NJ: Lawrence Earlbaum Associates, Inc.
- Schoen, H. L., Hirsch, C. R., & Ziebarth, S. W. (1998). *An emerging profile of the mathematical achievement of students in the Core-Plus Mathematics Project*. Paper presented at the Annual Meeting of the American Educational Research Association. San Diego, CA. ERIC: ED 421 351.
- Schoenfeld, A. H. (2002) Making mathematics work for all children: Issues of standards, testing, and equity, *Educational Researcher* **31** (2002), 13-25.
- Steen, L.A. (Ed.). (2001). *Mathematics and democracy: The case for quantitative literacy*. Washington, DC: The National Council on Education and the Disciplines.
- U.S. Department of Education. National Center for Educational Statistics. (1998). *Pursuing excellence: A study of U.S. Twelfth-grade mathematics and science achievement in international context*, NCES 98-049. Washington, DC: U.S. Government Printing Office.

## APPENDIX

### Mean Performance by Item

#### *Percent Subtest*

1. Experts say that 25% of all serious bicycle accidents involve head injuries and that, of all head injuries, 80% are fatal. What percentage of all serious bicycle accidents involve fatal head injuries?

A. 16%	<b>CPMP</b>	<b>77%</b>
B. 20%	<b>U.S.</b>	<b>57%</b>
C. 55%	<b>International</b>	<b>65%</b>
D. 105%	<b>Netherlands</b>	<b>83%</b>

2. In a school election with three candidates, Joe received 120 votes, Mary received 50 votes, and George received 30 votes. What percentage of the total number of votes did Joe receive?

A. 60%	<b>CPMP</b>	<b>86%</b>
B. $66\frac{2}{3}\%$	<b>U.S.</b>	<b>62%</b>
C. 80%	<b>International</b>	<b>63%</b>
D. 120%	<b>Netherlands</b>	<b>80%</b>

#### *Ratio & Proportion Subtest*

1. If there are 300 calories in 100 grams of a certain food, how many calories are there in a 30-gram portion of that food?

A. 90	<b>CPMP</b>	<b>88%</b>
B. 100	<b>U.S.</b>	<b>68%</b>
C. 900	<b>International</b>	<b>71%</b>
D. 1000	<b>Netherlands</b>	<b>85%</b>
E. 9000		

2. From a batch of 3000 light bulbs, 100 were selected at random and tested. If 5 of the light bulbs in the sample were found to be defective, how many defective light bulbs would be expected in the entire batch?

A. 15	<b>CPMP</b>	<b>89%</b>
-------	-------------	------------

B. 60	<b>U.S.</b>	<b>62%</b>
C. 150	<b>International</b>	<b>66%</b>
D. 300	<b>Netherlands</b>	<b>85%</b>
E. 600		

***Numbers & Operations Subtest***

1. In a vineyard there are 210 rows of vines. Each row is 192 m long and plants are planted 4 m apart. On average, each plant produces 9 kg of grapes each season. The total amount of grapes produced by the vineyard each season is closest to

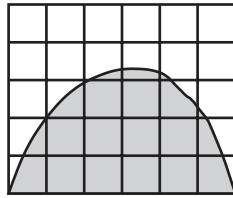
A. 10 000 kg	<b>CPMP</b>	<b>71%</b>
B. 100 000 kg	<b>U.S.</b>	<b>50%</b>
C. 400 000 kg	<b>International</b>	<b>55%</b>
D. 1 600 000 kg	<b>Netherlands</b>	<b>67%</b>

2. A school club is planning a bus trip to the wildlife park. A bus which will hold up to 45 people will cost \$600 and admission tickets cost \$30 each. If the cost of the trip, including bus and admission ticket, is set at \$50 per person, what is the minimum number of people who must participate to ensure that these costs are covered?

A. 12	<b>CPMP</b>	<b>60%</b>
B. 20	<b>U.S.</b>	<b>45%</b>
C. 30	<b>International</b>	<b>50%</b>
D. 45	<b>Netherlands</b>	<b>61%</b>

**Measurement Subtest**

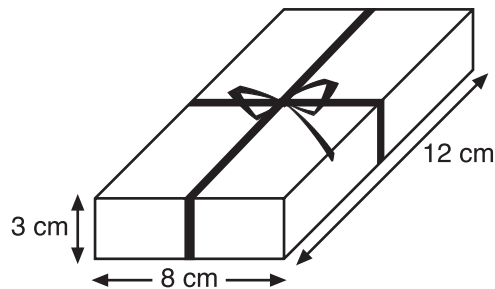
1.



Each of the small squares in the figure is 1 square unit. Which is the best estimate of the area of the shaded region?

- |                    |                      |            |
|--------------------|----------------------|------------|
| A. 10 square units | <b>CPMP</b>          | <b>81%</b> |
| B. 12 square units | <b>U.S.</b>          | <b>54%</b> |
| C. 14 square units | <b>International</b> | <b>60%</b> |
| D. 16 square units | <b>Netherlands</b>   | <b>75%</b> |
| E. 18 square units |                      |            |

2. Stu wants to wrap some ribbon around a box as shown and have 25 cm left to tie a bow. How long a piece of ribbon does he need?



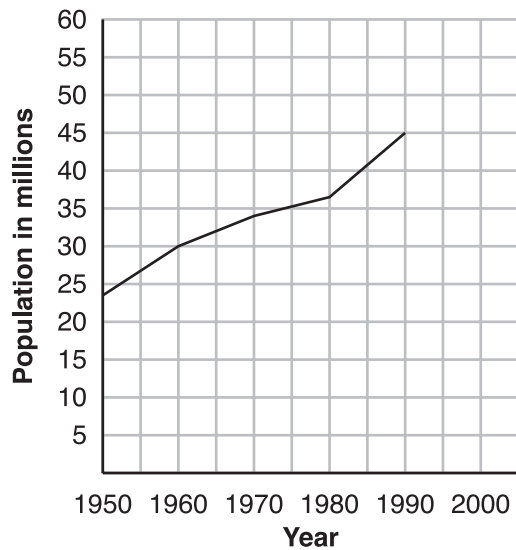
- |          |                      |            |
|----------|----------------------|------------|
| A. 46 cm | <b>CPMP</b>          | <b>66%</b> |
| B. 52 cm | <b>U.S.</b>          | <b>32%</b> |
| C. 65 cm | <b>International</b> | <b>45%</b> |
| D. 71 cm | <b>Netherlands</b>   | <b>62%</b> |
| E. 77 cm |                      |            |

3. Brighto soap powder is packed in cube-shaped cartons. A carton measures 10 cm on each side. The company decides to increase the length of each edge of the carton by 10 percent. How much does the volume increase?

- |                       |                      |            |
|-----------------------|----------------------|------------|
| A. $10 \text{ cm}^3$  | <b>CPMP 3</b>        | <b>40%</b> |
| B. $21 \text{ cm}^3$  | <b>U.S.</b>          | <b>17%</b> |
| C. $100 \text{ cm}^3$ | <b>International</b> | <b>31%</b> |
| D. $331 \text{ cm}^3$ | <b>Netherlands</b>   | <b>50%</b> |

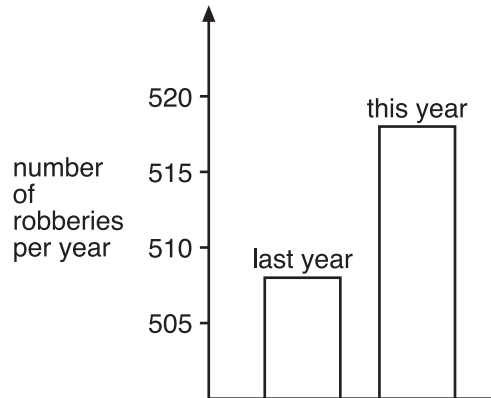
***Graphical Interpretation Subtest***

1. If the population increases by the same rate from the year 1990 to the year 2000 as in the years from 1980 to 1990, approximately what is the expected population by the year 2000?



- |               |                      |            |
|---------------|----------------------|------------|
| A. 47 million | <b>CPMP</b>          | <b>73%</b> |
| B. 50 million | <b>U.S.</b>          | <b>69%</b> |
| C. 53 million | <b>International</b> | <b>71%</b> |
| D. 58 million | <b>Netherlands</b>   | <b>85%</b> |

2. A TV reporter showed this graph and said: “There’s been a huge increase in the number of robberies this year.”



Do you consider the reporter’s statement to be a reasonable interpretation of the graph?


Yes \_\_\_ No \_\_\_

Briefly explain.

**CPMP (51%) U.S. (42%) International (41%) Netherlands (58%)**

Percents are of 2 possible points.

3. Using the set of axes below, sketch a graph which shows the relationship between the height of a person and his/her age from birth to 30 years. Be sure to label your graph, and include a realistic scale on each axis.



**CPMP (45%) U.S. (32%) International (44%) Netherlands (51%)**

Percents are of 2 possible points.